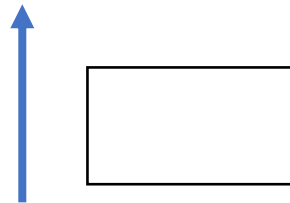


Mastery Maths Mat

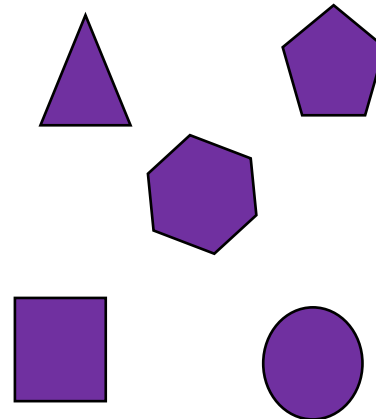
Count in steps of 2 from the given number.

0	<input type="text"/>	<input type="text"/>	<input type="text"/>
14	<input type="text"/>	<input type="text"/>	<input type="text"/>
7	<input type="text"/>	<input type="text"/>	<input type="text"/>
23	<input type="text"/>	<input type="text"/>	<input type="text"/>

Draw the arrow after it has turned a half turn clockwise.




Look at the shapes. Tick the hexagon.









Calculate the answers.

$2 \times 8 =$

$5 \times 4 =$

How many books Ola read in the summer holidays.  = 1

Week 1	
Week 2	
Week 3	
Week 4	
Week 5	
Week 6	

How many more books did Ola read in week 2 than week 4?

$15 + 73 =$

Look at the objects.

What 3D shapes are they?



