

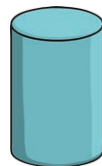

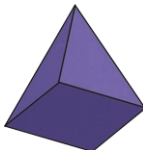
Section 1

Make the lowest two-digit number you can with the cards. You can only use each digit once.

3	8	2	7
□			

Section 2

Which 3D shape has three faces? Tick the correct shape.

		
□	□	□

Section 3

$45 - 15 = \square$

$28 - 17 = \square$

$33 - 11 = \square$

Section 4

23 people are watching a film. 12 people leave before the end. How many people watch the film until the end?



Section 5

Write two different ways of making 10p using 1p, 2p and 5p coins.

--

--

Section 6

What are the next three numbers?

13, 16, 19, □, □, □



Section 7

If $52 = 50 + 2$, then $63 =$

--

Section 8

Measure the line.



cm
