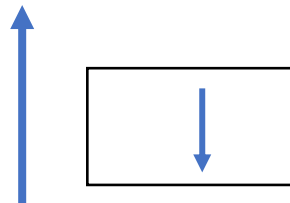


# Mastery Maths Mat

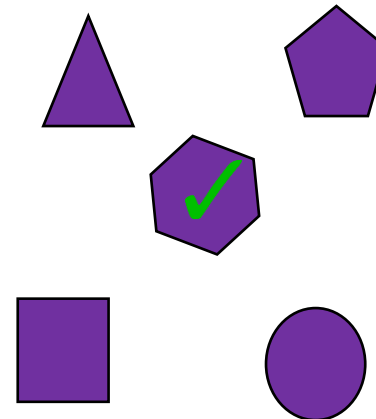
Count in steps of 2 from the given number.

0	2	4	6
14	16	18	20
7	9	11	13
23	25	27	29

Draw the arrow after it has turned a half turn clockwise.




Look at the shapes. Tick the hexagon.









Calculate the answers.

$$2 \times 8 = \boxed{16}$$

$$5 \times 4 = \boxed{20}$$

How many books Ola read in the summer holidays.  = 1

Week 1	
Week 2	
Week 3	
Week 4	
Week 5	
Week 6	

How many more books did Ola read in week 2 than week 4?

$$15 + 73 =$$

$$\begin{array}{r} 15 \\ + 73 \\ \hline 88 \end{array}$$

Look at the objects.

What 3D shapes are they?

