

Always, Sometimes, Never?

Alex says,

If I split a shape into 4 parts, I have split it into quarters.

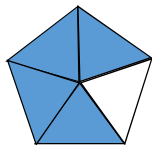


Explain your answer.




2

© White Rose Maths 2019

Which representations of $\frac{4}{5}$ are incorrect?



$$\frac{4}{5}$$



Explain how you know.

3

© White Rose Maths 2019